



Early Bird

Write the number.
fifteen



What number is this?

Tens	Ones
○ ○	○ ○ ○

Write the fact family.

12	
	6

Which animal is the favourite?

Cat	🐾 🐾 🐾 🐾 🐾
Dog	🐾 🐾
Hamster	🐾 🐾 🐾


Solve these:

$17-5=$

$16+3=$

$11-7=$

What shape is this?



Early Bird

Write the number.
nineteen



What number is this?

Tens	Ones
○ ○	○ ○

Write the fact family.

11	
	6

Which animal is the least favourite?

Cat	🐾 🐾 🐾 🐾 🐾
Dog	🐾 🐾
Hamster	🐾 🐾 🐾


Solve these:

$18-7=$

$14+5=$

$17-7=$

What shape is this?





Early Bird

Write the number.
eleven



What number is this?

Tens	Ones
○	○ ○ ○ ○

Write the fact family.


11	
	8

How many more chose cat than dog?

Cat	🐾 🐾 🐾 🐾 🐾
Dog	🐾 🐾
Hamster	🐾 🐾 🐾

Solve these:
 $13-7=$
 $9+6=$
 $17-8=$

What shape is this?



Early Bird

Write the number.
thirteen



What number is this?

Tens	Ones
○ ○	○ ○ ○ ○

Write the fact family.

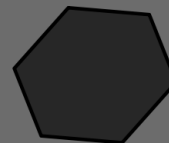
13	
	6

How many more chose hamster than dog?

Cat	🐾 🐾 🐾 🐾 🐾
Dog	🐾 🐾
Hamster	🐾 🐾 🐾

Solve these:
 $12-8=$
 $12+6=$
 $16-8=$

What shape is this?





Early Bird

Write the number.

twenty



What number is this?

Tens	Ones
○ ○ ○	○ ○ ○ ○ ○

Write the fact family.

15	
	9

How many more chose cat than hamster?

Cat	🐾 🐾 🐾 🐾 🐾
Dog	🐾 🐾
Hamster	🐾 🐾 🐾

Solve these:
19-8=
6+6=
13-8=

What shape is this?

