



Early Bird

Write the number.

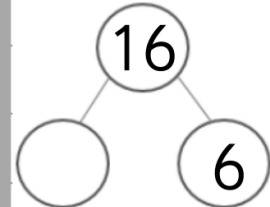


17

Order these numbers.

17 5 18 7 13 1

Write the fact family.



Put these in order.



A



B



C

Solve these:

$18-2=$

$11+3=$

$14-4=$

How many vertices?



Early Bird

Write the number.

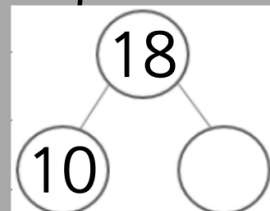


12

Order these numbers.

11 18 15 13 7 9 2

Write the fact family.



Order these from shortest to longest?



A



B



C

Solve these:

$19-5=$

$17+3=$

$15+4=$

How many vertices?





Early Bird

Write the number.

20



Order these numbers.

19 6 17 5 11 20 18

Order these from shortest to longest?



A

B

C

Solve

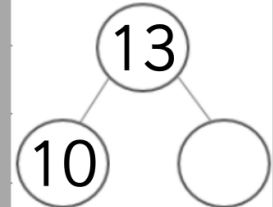
these:

$$16-3=$$


$$18-9=$$

$$15+5=$$

Write the fact family.



How many vertices?



Early Bird

Write the number.


13



Order these numbers.

16 3 18 7 19 6 17

Order these from shortest to longest?



A

B

C

Solve

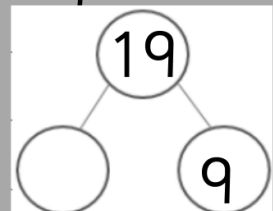
these:

$$13-3=$$

$$14+4=$$

$$10+5=$$

Write the fact family.



How many vertices?





Early Bird

Write the number.


15



Order these numbers.

15 12 17 18 14 13

Order these from shortest to longest?



A



B



C

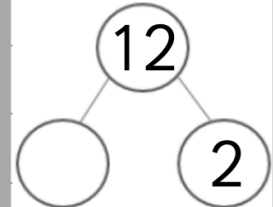
Solve these:

$$19 - 7 =$$

$$14 + 6 =$$

$$11 + 7 =$$

Write the fact family.



How many vertices?

