



# Early Bird

Which is the biggest number?



How many tens in:

49 or 34

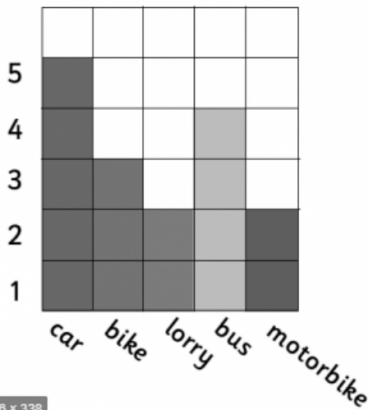
**38**

Write the fact family.

20

9

Which is the favourite?



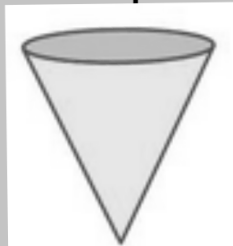
Solve these:

$19-5=$

$12+5=$

$11-5=$

What shape is this?



# Early Bird

Which is the biggest number?



How many tens in:

46 or 42

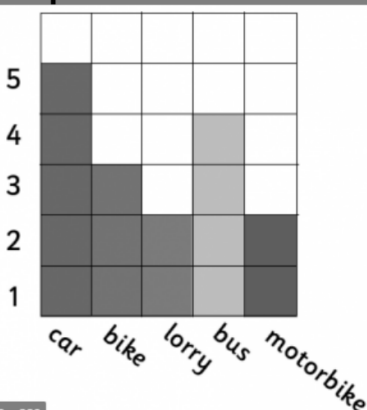
**21**

Write the fact family.

20

6

Which is the least popular?



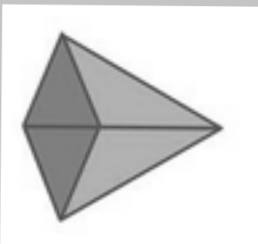
Solve these:

$11+6=$

$12-4=$

$13-9=$

What shape is this?





## Early Bird

Which is the biggest number?

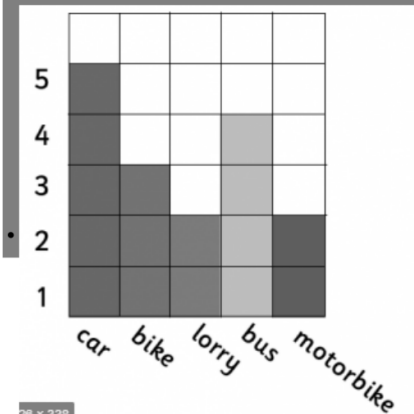


How many tens in:

23 or 32

**81**

How many more chose car than bike?



Solve

these:

$11-6=$

$12+4=$

$13+6=$

Write the fact family.

20

4

What shape is this?



## Early Bird

Which is the biggest number?

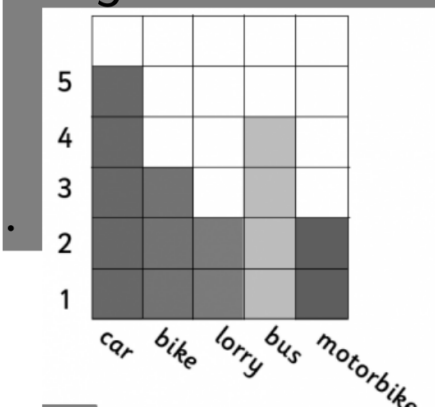


How many tens in:

15 or 51

**28**

How many more chose bus than lorry?



Solve

these:

$16+3=$

$18-8=$

$1+16=$

Write the fact family.

20

11

What shape is this?





# Early Bird

Which is the biggest number?

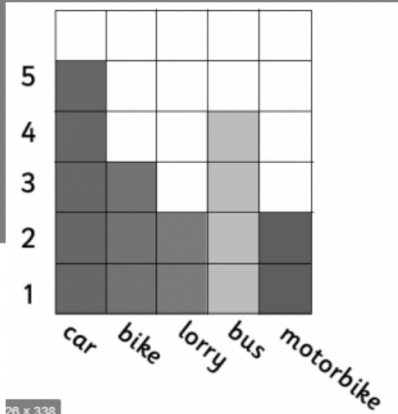


How many tens in:

49 or 46

**79**

How many chose either bus or car?



28 x 338

Solve

these:

$$6 + 13 =$$

$$6 + 8 =$$

$$11 - 6 =$$

Write the fact family.

20

13

What shape is this?

