



Early Bird

What is one more than?




How many ones in: **17 20 33**

38

Write the fact family.

11	
	9

What does this show?



 x =

Solve these:

$13-5=$

$22+5=$

$11-9=$

How much is this?



Early Bird

What is one more than?




How many ones in: **14 36 84**

42

Write the fact family.

13	
	4

What does this show?



 x =

Solve these:

$13+5=$

$22-5=$

$11+9=$

How much is this?





Early Bird

What is one more than?




How many ones in: **37 25 40**
99

Write the fact family.

12	
	7

What does this show?



Solve these:
 $16-5=$
 $20-5=$
 $12+3=$

How much is this?



 x =



Early Bird

What is one more than?




How many ones in: **62 71 19**
31

Write the fact family.

13	
	6

What does this show?



Solve these:
 $13+5=$
 $19-6=$
 $13+6=$

How much is this?



 x =



Early Bird

What is one more than?



How many ones in:


60

39 49 59

Write the fact family.

15	
	7

What does this show?



Solve

these:

$12+5=$

$17-6=$

$16+6=$

 x =

How much is this?

