



Early Bird

Write the number in words.

12



Order these numbers.

14 12 8 4 36

Put these in order from longest to shortest.



A



B



C

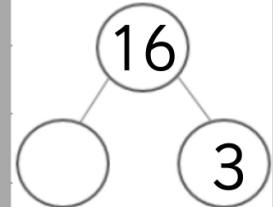
Solve these:

$18-2=$

$11+3=$

$14-4=$

Write the fact family.



How many vertices?



Early Bird

Write the number in words.

16



Order these numbers.

15 35 5 45 25

Order these from longest to shortest?



A



B



C

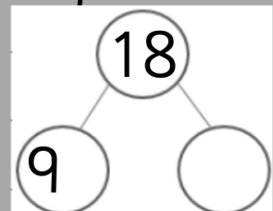
Solve these:

$19-5=$

$17+3=$

$15+4=$

Write the fact family.



How many vertices?





Early Bird

Write the number
in words.

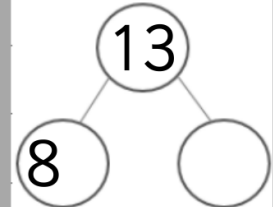
19



Order these numbers.

25 16 17 15 36

Write the fact
family.



Order these from
longest to
shortest?



A B C


Solve
these:

$16-3=$

$18-9=$

$15+5=$

How many
vertices?



Early Bird

Write the number
in words.

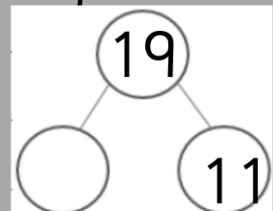
11



Order these numbers.

27 36 19 11 7 18

Write the fact
family.



Order these from
longest to
shortest?



A B C


Solve
these:

$13-3=$

$14+4=$

$10+5=$

How many
vertices?





Early Bird

Write the number
in words.



20

Order these numbers.

36 25 14 16 27 10

Order these from
longest to
shortest?



A



B



C

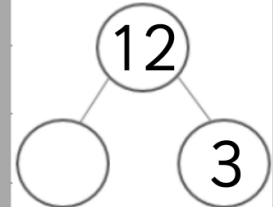
Solve
these:

$$19 - 7 =$$

$$14 + 6 =$$

$$11 + 7 =$$

Write the fact
family.



How many
vertices?

