



Write the number.  
**fifteen**



What number is this?

Tens	Ones
○ ○	○ ○ ○

Write the fact family.

12	
	6

Which animal is the favourite?

Cat	🐾 🐾 🐾 🐾 🐾
Dog	🐾 🐾
Hamster	🐾 🐾 🐾


Solve these:

$$17-5=$$

$$16+3=$$

$$11-7=$$

What shape is this?



Write the number.  
**nineteen**



What number is this?

Tens	Ones
○ ○	○ ○

Write the fact family.

11	
	6

Which animal is the least favourite?

Cat	🐾 🐾 🐾 🐾 🐾
Dog	🐾 🐾
Hamster	🐾 🐾 🐾


Solve these:

$$18-7=$$

$$14+5=$$

$$17-7=$$

What shape is this?





Write the number.  
**eleven**



What number is this?

Tens	Ones
○	○ ○ ○ ○ ○

Write the fact family.


11	
	8

How many more chose cat than dog?

Cat	🐾 🐾 🐾 🐾 🐾
Dog	🐾 🐾
Hamster	🐾 🐾 🐾

Solve these:  
 $13-7=$   
 $9+6=$   
 $17-8=$

What shape is this?



Write the number.  
**thirteen**



What number is this?

Tens	Ones
○ ○	○ ○ ○ ○

Write the fact family.

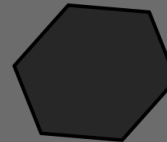
13	
	6

How many more chose hamster than dog?

Cat	🐾 🐾 🐾 🐾 🐾
Dog	🐾 🐾
Hamster	🐾 🐾 🐾

Solve these:  
 $12-8=$   
 $12+6=$   
 $16-8=$

What shape is this?





Write the number.  
**twenty**



What number is this?

Tens	Ones

Write the fact family.

15	
	9

How many more chose cat than hamster?

Cat	
Dog	
Hamster	

Solve these:  
 $19-8=$   
 $6+6=$   
 $13-8=$

What shape is this?

